

4


Bird—A Flying Wonder

Let Us Learn About

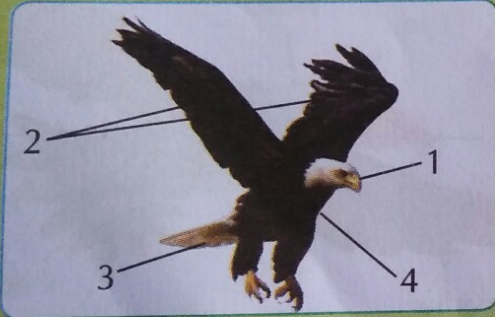
- Structure of a bird



Body parts of a bird



Time to Answer



Identify which part (1, 2, 3, 4 in figure) of the bird

1. helps it to eat Beak
2. helps it to fly Wings
3. helps it to change direction Tail
4. keeps it warm Feathers



Time to Answer

Match the birds with their type of beak.

1. Spoonbill

2. Parrot

3. Woodpecker

4. Eagle

(a) Chisel shaped beak

(b) Broad and flat beak

(c) Curved beak

(d) Hooked beak

3

1

2

4



Time to Answer

Name the following.

1. Two flightless birds
2. Two birds having webbed feet
3. Upward movement of wings
4. Downward movement of wings

ostrich


kiwi

Duck

swan

Upstroke

Downstroke



Time to Answer



State true or false for the following:

1. A heron has wading legs. T
2. An eagle and woodpecker have the same type of legs. F
3. All the birds have webbed feet. F
4. Birds with scratching feet have three long toes in front and a short one at back. T




Time to Answer



Match the following.

1. Nest
2. Woodpecker
3. Weaver bird
4. Tailorbird
5. Pigeon

- (a) Woven nest **3**
- (b) Protection **1**
- (c) Cup-shaped nest **5**
- (d) Hollow nest **2**
- (e) Stitched nest **4**



Let Us Practise



A. Tick (✓) the correct answer.

1. Light and boat-shaped body of birds help them
 (a) to fly
 (b) to eat
 (c) to run fast
 (d) all of the above
2. These feathers are fluffy and soft and keep the bird's body warm.
 (a) Body feathers
 (b) Down feathers
 (c) Up feathers
 (d) Flight feathers
3. During downstroke, wings move
 (a) upward and forward
 (b) downward and backward
 (c) to and fro
 (d) none of the above

4. Which of the following is a flightless bird?

(a) Kiwi

(c) Ostrich

(b) Penguin

~~(d) All of the above~~

5. The nest of birds like vulture is called

(a) colony

~~(b) eyrie~~

(b) stitched nest

(d) hollow nest

Fill in the blanks.

³
webbed

⁶
tailorbird

⁵
talons

¹
warm

²
flightless

⁴
curved

1. Down feathers keep the body _____.
2. An ostrich and a penguin are _____ birds.
3. A duck has _____ toes which help it to swim in water.
4. A parrot has a _____ beak.
5. Claws of hawks are called _____.
6. A _____ stitches leaves to make nest.

C. Write True or False.

1. Birds have four feet with four toes on each.
2. An ostrich does not fly.
3. Birds do not take care of their young ones.
4. Birds do not have hollow bones.
5. The tail of a bird acts like a rudder.
6. An eagle is a seed-eating bird.

F

T

F

F

T

F

D. Match the following:

D. Match the following:

1. Ostrich

2. Eagle

3. Duck

4. Hen

5. Penguin

(a) Makes nest in the ground

(b) Water bird 3

(c) Scratching feet 4

(d) Flightless bird 1

(e) Talons 2