




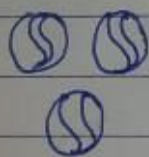


Class - I
Sub - Maths

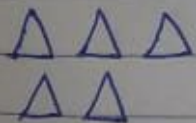


PAGE NO.:
DATE:

Chapter - 3
Addition 1-10

Count and write

  = 
 + =

 +  = 
 + =

 +  = 
 + =

2nd term - date

Chapter - 2

Addition

Add by forward counting -

$$3 + 2 = 5$$

$$6 + 4 = 10$$

$$5 + 3 = 8$$

$$2 + 7 = 9$$

$$4 + 2 = 6$$

$$1 + 3 = 4$$

Fill in the missing numbers -

$$5 + 2 = 7$$

$$2 + 1 = 3$$

$$3 + 2 = 5$$

$$4 + 4 = 8$$

$$4 + 6 = 10$$

$$3 + 6 = 9$$

Add the following :-

$$\begin{array}{r} 3 \quad \bullet \bullet \bullet \\ + 2 \quad \bullet \bullet \\ \hline 5 \end{array}$$

$$\begin{array}{r} 4 \quad \bullet \bullet \bullet \bullet \\ + 5 \quad \bullet \bullet \bullet \bullet \bullet \\ \hline 9 \end{array}$$

$$\begin{array}{r} 1 \quad \bullet \\ + 2 \quad \bullet \bullet \\ \hline 3 \end{array}$$

$$\begin{array}{r} 7 \quad \bullet \bullet \bullet \bullet \bullet \bullet \bullet \bullet \\ + 2 \quad \bullet \bullet \\ \hline 9 \end{array}$$

$$\begin{array}{r} 5 \quad \bullet \bullet \bullet \bullet \bullet \\ + 3 \quad \bullet \bullet \bullet \\ \hline 8 \end{array}$$

$$\begin{array}{r} 2 \quad \bullet \bullet \\ + 4 \quad \bullet \bullet \bullet \bullet \\ \hline 6 \end{array}$$

$$\begin{array}{r} 3 \quad \bullet \bullet \bullet \\ + 4 \quad \bullet \bullet \bullet \bullet \\ \hline 7 \end{array}$$

$$\begin{array}{r} 4 \quad \bullet \bullet \bullet \bullet \\ + 4 \quad \bullet \bullet \bullet \bullet \\ \hline 8 \end{array}$$

